



Solve each problem.

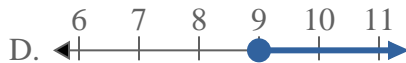
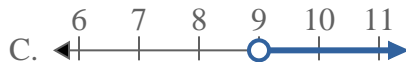
1) Which option best shows $X < -17$



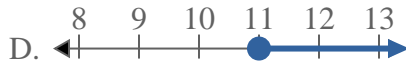
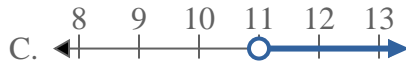
3) Which option best shows $X < -5$



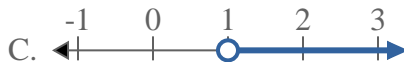
5) Which option best shows $X \leq 9$



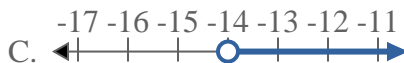
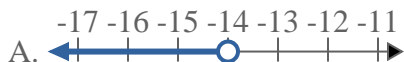
7) Which option best shows $X \geq 11$



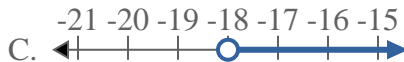
2) Which option best shows $X > 1$



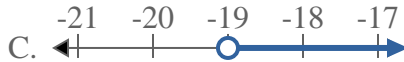
4) Which option best shows $X < -14$



6) Which option best shows $X > -18$



8) Which option best shows $X > -19$



Answers

1. _____

2. _____

3. _____

4. _____

5. _____

6. _____

7. _____

8. _____



Solve each problem.

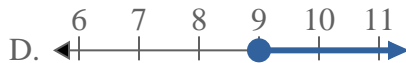
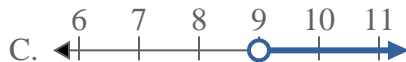
1) Which option best shows $X < -17$



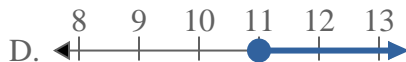
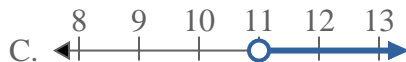
3) Which option best shows $X < -5$



5) Which option best shows $X \leq 9$



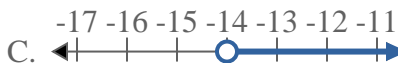
7) Which option best shows $X \geq 11$



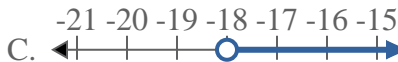
2) Which option best shows $X > 1$



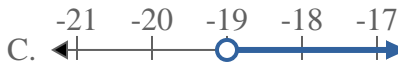
4) Which option best shows $X < -14$



6) Which option best shows $X > -18$



8) Which option best shows $X > -19$



Answers

1. **A**

2. **C**

3. **A**

4. **A**

5. **B**

6. **C**

7. **D**

8. **C**